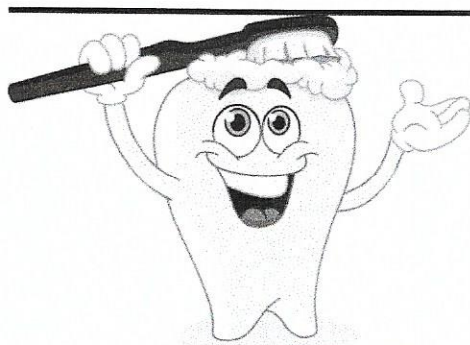


Day 6


Parents/Guardians: Please circle the appropriate response.



1. _____ Brush Your Teeth

Brushed teeth

Refused to brush teeth



2. _____ Complete the attached Math sheet

Completed

Refused to complete



3. _____ Complete the attached Reading sheet

Completed




Refused to complete

Matching Numbers




Name: _____

Circle the card(s) to represent each given number.




5






6






8






4



3



9






Matching Numbers




Name: _____

Circle the card(s) to represent each given number.




15






12






14






19



20



17



Name _____


2

Reading Comprehension

Read the short passage and answer the questions.

A Trip to the Zoo

Mario took a trip to the zoo. He saw a big lion. The lion's name was Rio. Mario loves the zoo!



1. Where did Mario go?

- ☐ to school
- ☐ the zoo
- ☐ to a farm

2. What did Mario see?

- ☐ a dog
- ☐ a lion
- ☐ a friend

3. What does Mario love?

- ☐ a lion
- ☐ Rio
- ☐ the zoo


Name _____

Reading Comprehension

Read the short passage and answer the questions.

A Picnic

Joey went on a picnic with his family. They packed lots of food. Joey ate 3 cookies. It was a nice day.



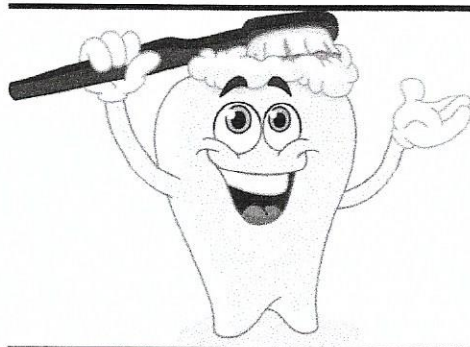
1. What did Joey do with his family?

2. What did they pack?

3. How many cookies did Joey eat?

Day 7

Parents/Guardians: Please circle the appropriate response.




1.

Brush Your Teeth

Brushed teeth

Refused to brush teeth




2.

Complete the attached Math sheet

Completed

Refused to complete



3.

Complete the attached Reading sheet

Completed


Refused to complete

Addition Facts to 10


Name: _____

Circle the card(s) to show the sum. Write the sum.


$$3 + 2 =$$




$$4 + 3 =$$




$$5 + 1 =$$




$$3 + 6 =$$



$$4 + 5 =$$




$$2 + 8 =$$




Subtraction Facts to 10 Name: _____

Place X's over the hearts to show the subtraction. Write the difference.


$3 - 2 =$




$4 - 3 =$




$5 - 1 =$




$6 - 3 =$



$8 - 5 =$



$10 - 7 =$



Name _____

Reading Comprehension

Read the short passage and answer the questions.

A Summer Treat

I am eating ice cream. I love ice cream. My favorite is cherry. I see the ice cream man. Do you like ice cream?



1. What am I eating?

- ☐ lunch
- ☐ ice cream
- ☐ a treat

2. What is my favorite?

- ☐ cherry
- ☐ lemon
- ☐ ice

3. Who do I see?

- ☐ ice cream
- ☐ mom
- ☐ the ice cream man

Name _____

Reading Comprehension

Read the short passage and answer the questions.

Flower Garden

I am helping mom. We are planting a garden. Mom will plant sunflowers. I will plant tulips. We will have fun!



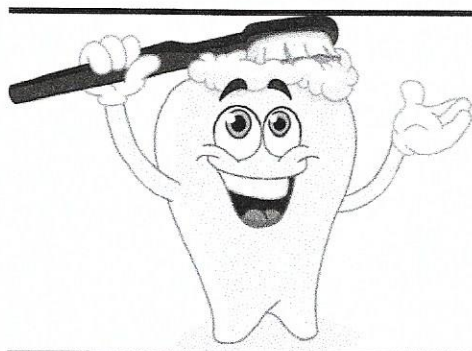
1. What am I doing?

2. What will mom plant?

3. What will I plant?

Day 8


Parents/Guardians: Please circle the appropriate response.



1. _____ Brush Your Teeth

Brushed teeth

Refused to brush teeth



2. _____ Complete the attached Math sheet

Completed

Refused to complete



3. _____ Complete the attached Reading sheet

Completed




Refused to complete

Addition Facts to 20




Name: _____

Circle the card(s) to show the sum. Write the sum.




$5 + 7 =$






$4 + 9 =$






$6 + 8 =$






$8 + 4 =$



$7 + 8 =$





$9 + 5 =$





Subtraction Facts to 20 Name: _____

Place X's over the hearts to show the subtraction. Write the difference.



$$15 - 8 =$$





$$17 - 9 =$$





$$12 - 7 =$$





$$11 - 6 =$$



$$13 - 5 =$$



$$14 - 7 =$$




Name _____

Reading Comprehension

Read the short passage and answer the questions.

Football

Lou plays football. He loves football. Lou can run fast and throw far. He will ask Jon to play with him.



1. What does Lou play?

- ☐ games
- ☐ football
- ☐ soccer

2. What can Lou do?

- ☐ run fast
- ☐ jump high
- ☐ score

3. What will he do?

- ☐ wear a hat
- ☐ run fast
- ☐ ask Jon to play


Name _____

Reading Comprehension

Read the short passage and answer the questions.

Lunch Time

Sara had lunch outside. She sat with her friends. Sara ate an apple. It was big and red. Sara had a good lunch.



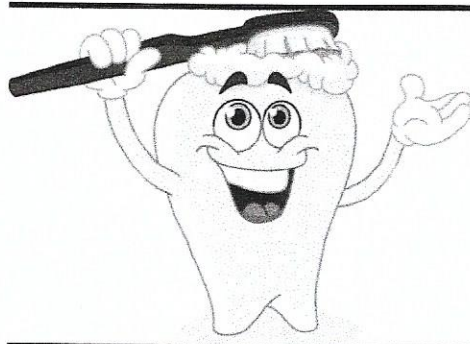
1. Where did Sara eat lunch?

2. Who did she sit with?

3. What did she eat?

Day 9

Parents/Guardians: Please circle the appropriate response.




1.

Brush Your Teeth

Brushed teeth

Refused to brush teeth




2.

Complete the attached Math sheet

Completed

Refused to complete



3.

Complete the attached Reading sheet



Completed

Refused to complete



Subtraction Equations

Name: _____



Write the equation. Solve.





$$\underline{\hspace{2cm}} - \underline{\hspace{2cm}} = \underline{\hspace{2cm}}$$





$$\underline{\hspace{2cm}} - \underline{\hspace{2cm}} = \underline{\hspace{2cm}}$$



$$\underline{\hspace{2cm}} - \underline{\hspace{2cm}} = \underline{\hspace{2cm}}$$



$$\underline{\hspace{2cm}} - \underline{\hspace{2cm}} = \underline{\hspace{2cm}}$$





$$\underline{\hspace{2cm}} - \underline{\hspace{2cm}} = \underline{\hspace{2cm}}$$



Addition Equations

Name: _____



Write the equation. Solve.





$$\underline{\hspace{2cm}} + \underline{\hspace{2cm}} = \underline{\hspace{2cm}}$$





$$\underline{\hspace{2cm}} + \underline{\hspace{2cm}} = \underline{\hspace{2cm}}$$



$$\underline{\hspace{2cm}} + \underline{\hspace{2cm}} = \underline{\hspace{2cm}}$$



$$\underline{\hspace{2cm}} + \underline{\hspace{2cm}} = \underline{\hspace{2cm}}$$



$$\underline{\hspace{2cm}} + \underline{\hspace{2cm}} = \underline{\hspace{2cm}}$$

Name _____

Reading Comprehension

Read the short passage and answer the questions.

Jack's Balloon

Jack has a balloon. His balloon is blue. Jack won his balloon at the carnival. He is very happy!



1. Who has a balloon?

- ☐ James
☐ Jack
☐ me

2. What color is it?

- ☐ red
☐ white
☐ blue

3. Where did he get it?

- ☐ at the store
☐ at school
☐ at the carnival

Name _____

Reading Comprehension


Read the short passage and answer the questions.

A Worm

I see a worm. The worm is
small. The worm is brown.

I will call the worm Joe.

Joe is nice. I will show my
sister the worm.



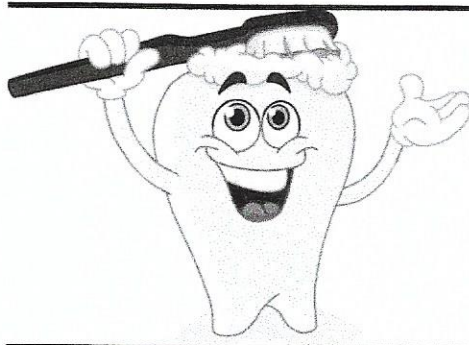
1. What do I see?

2. What does it look like?

3. Who will I show?

Day 10

Parents/Guardians: Please circle the appropriate response.




1.

Brush Your Teeth

Brushed teeth

Refused to brush teeth



2.

Complete the attached Math sheet

Completed

Refused to complete



3.

Complete the attached Reading sheet




Completed

Refused to complete




Addition Equations

Name: _____




Write the equation. Solve.






$$\underline{\quad} + \underline{\quad} + \underline{\quad} = \underline{\quad}$$






$$\underline{\quad} + \underline{\quad} + \underline{\quad} = \underline{\quad}$$



$$\underline{\quad} + \underline{\quad} + \underline{\quad} = \underline{\quad}$$



$$\underline{\quad} + \underline{\quad} + \underline{\quad} = \underline{\quad}$$





$$\underline{\quad} + \underline{\quad} + \underline{\quad} = \underline{\quad}$$



Subtraction Equations

Name: _____



Write the equation. Solve.





$$\underline{\hspace{2cm}} - \underline{\hspace{2cm}} = \underline{\hspace{2cm}}$$





$$\underline{\hspace{2cm}} - \underline{\hspace{2cm}} = \underline{\hspace{2cm}}$$



$$\underline{\hspace{2cm}} - \underline{\hspace{2cm}} = \underline{\hspace{2cm}}$$



$$\underline{\hspace{2cm}} - \underline{\hspace{2cm}} = \underline{\hspace{2cm}}$$



$$\underline{\hspace{2cm}} - \underline{\hspace{2cm}} = \underline{\hspace{2cm}}$$

Name _____

Reading Comprehension

Read the short passage and answer the questions.

Face Paint

Mary is painting Jan's face. She is painting a heart. The heart is red. Mary will show her mom.



1. Who is painting Jan's face?

- ☐ Jan
☐ Mary
☐ mom

2. What is she painting?

- ☐ a heart
☐ a lion
☐ a cat

3. Who will Mary show?

- ☐ her friends
☐ her mom
☐ Jan


Name _____

Reading Comprehension

Read the short passage and answer the questions.

A Winter Snowman

Carol loves wintertime. She is building a snowman. Her snowman is taller than she is. His name is Frosty. She will show all of her friends.



1. What does Carol love?

2. What is Carol building?

3. What is his name?
