

Math Packet #16

1. Multiply (show work)

$23 \times 23 =$ _____

$43 \times 54 =$ _____

$9 \times 6 =$ _____
 $9 \times 9 =$ _____
 $8 \times 9 =$ _____
 $9 \times 7 =$ _____
 $9 \times 4 =$ _____

2. The table shows the number of parks in each city.

New York, NY	Seattle, WA	Tampa, FL	San Francisco, CA	Houston, TX
435	744	198	201	340

How many more parks are in New York and Seattle than in Houston and San Francisco?

3. Mary is shopping for college books. Three of the books she needs are on sale for \$65 each and the two other books are priced at \$50 each. If she pays with 3 \$100 bills, how much change should she receive?

4. Write a word problem using multiplication.


Solve it.

Answer _____

1. Maria has 4 baskets with 30 apples in each one and two baskets with 10 apples in each one. Marcos has 3 baskets with 25 apples in each one and one basket with 30 apples. How many more apples does Maria have?

Answer _____

2. Match the congruent figures




3. Add each one and show work.

$2,341 + 2,350 =$ _____

$3,341 + 2,340 =$ _____

Write the following number in word form **1,300,340**

4. Are the figures below congruent? _____



Explain your answer _____

1. Look at the table.

How many more coins did Molly, Sam and Sasha collect than Annie, Jacob and Marcos?

Student	Coins collected
Annie	234
Jacob	434
Marcos	128
Molly	530
Sam	348
Sasha	231

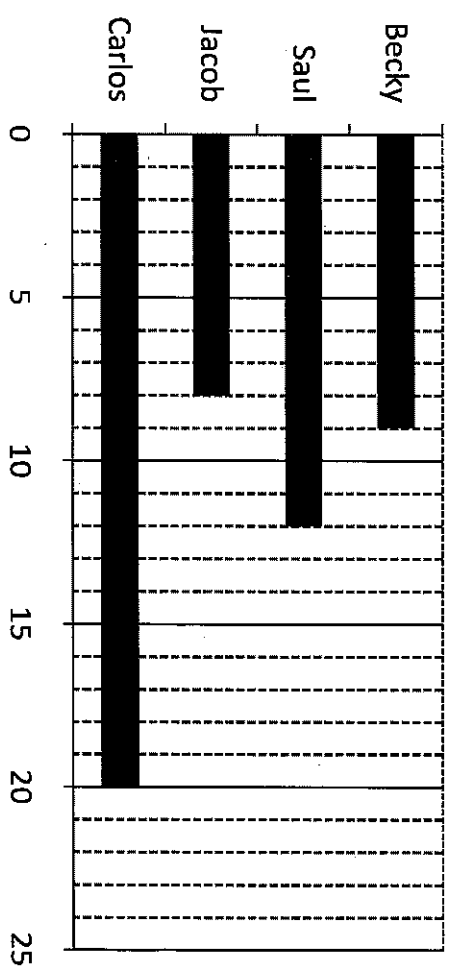
_____ more coins.

Multiply

- | | |
|----------------------|-----------------------|
| $5 \times 9 =$ _____ | $10 \times 9 =$ _____ |
| $5 \times 6 =$ _____ | $10 \times 8 =$ _____ |
| $8 \times 9 =$ _____ | $4 \times 4 =$ _____ |
| $3 \times 9 =$ _____ | $7 \times 4 =$ _____ |
| $7 \times 7 =$ _____ | $4 \times 3 =$ _____ |
| $5 \times 3 =$ _____ | $11 \times 9 =$ _____ |
| $2 \times 8 =$ _____ | $12 \times 3 =$ _____ |
| $9 \times 9 =$ _____ | $11 \times 3 =$ _____ |
| $5 \times 5 =$ _____ | $12 \times 5 =$ _____ |


2. The graph below shows the amount of books read by each student.

How many more books did Carlos read than Becky and Jacob altogether?



Carlos read _____ more books.

1. Circle the figures that have a line of symmetry.



2. Which decimal is greater than 1.10?


- A .99
- B 1.01
- C 1.2
- D 1.10

3. Order the numbers from least to greatest.

23,435 23,876 33,456 23,985


456 487 499 523

4. Does the figure below have a line of symmetry? _____




Explain your answer _____

1. Circle the figures that have a line of symmetry.



2. Which decimal is shown below?



+ .30 =

Answer _____

3. Which letters do NOT have a line of symmetry?

U S Q E

4. Write the following number in standard form.

one million two hundred thousand three hundred three

Thirty three thousand four hundred forty four

- a. U and E
- b. S
- c. S and Q
- d. S, Q and E