

Wagner SS  
Day 17-21

Day 17

What is the US Census? It is an official count or survey of the population of the United States and its territories.

How often is the US Census completed? Every 10 years

How is the information (data) used? To help in providing money/supplies for areas such as schools, hospitals, roads, day care centers, playgrounds, etc.

Answer the following questions about the Census, and complete questions for the map.

1. What kinds of things does a place with a lot of young kids need?

---

---

2. How do government agencies know where these things are needed?

---

---



Day ~~8-21~~

You are going to be a census taker! For day ~~8~~, you are to take a census for your household, and for days ~~19-21~~ call a family member or friend and complete a census on their households. On a piece of notebook paper write down the following information:

1. Names of members that live in the household (can just be first names)
2. How old are the household members?
3. What is their race/nationality? White, Black, Hispanic, Asian, etc.
4. How many people total lived in the household as of 03/12/2020 (our last day in the classroom)

You may type the assignment if that is easier for you. Please number each answer 1-4.

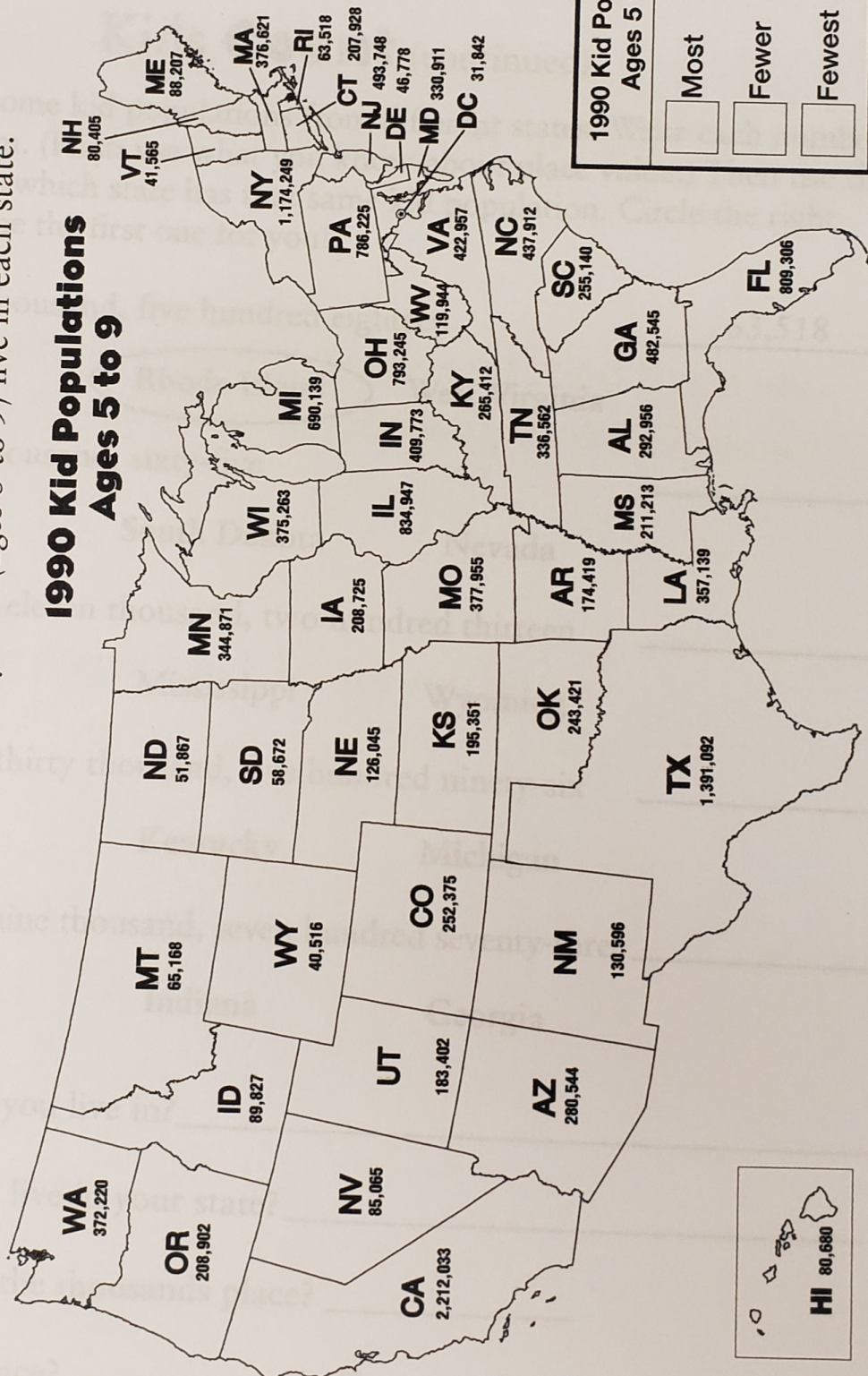
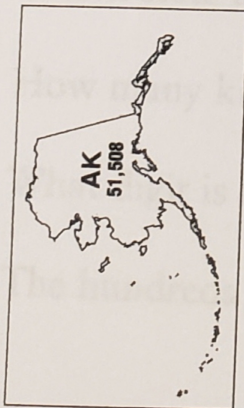
Stay Safe and see you soon!



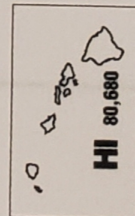
Name: \_\_\_\_\_

# Kids Count

- Everyone counts in the census. Even kids! This map shows kid populations, or how many kids (ages 5 to 9) live in each state.



1990 Kid Population Ages 5 to 9	
<input type="checkbox"/> Most	500,000 or greater
<input type="checkbox"/> Fewer	150,000 to 499,000
<input type="checkbox"/> Fewest	149,999 or less



Source: Estimates of the Population of the U.S., Regions, Divisions, and States by 5-Year Age Group and Sex (April 1, 1990).





Day 17

## Lesson 2 Activity Worksheet (continued)

Name: \_\_\_\_\_

### Kids **Count** (continued)

● Below are some kid populations from different states. Write each number in standard form. (Hint: use what you know about **place value**.) Then use the map to find out which state has that same kid population. Circle the right state. We've done the first one for you!

1. Sixty-three thousand, five hundred eighteen 63,518

Delaware

Rhode Island

West Virginia

2. Eighty-five thousand, sixty-five \_\_\_\_\_

Missouri

South Dakota

Nevada

3. Two hundred eleven thousand, two hundred thirteen \_\_\_\_\_

Pennsylvania

Mississippi

Wyoming

4. One hundred thirty thousand, five hundred ninety-six \_\_\_\_\_

New Mexico

Kentucky

Michigan

5. Four hundred nine thousand, seven hundred seventy-three \_\_\_\_\_

Oregon

Indiana

Georgia

6. Which state do you live in? \_\_\_\_\_

How many kids live in your state? \_\_\_\_\_

What digit is in the thousands place? \_\_\_\_\_

The hundreds place? \_\_\_\_\_ The ones place? \_\_\_\_\_